

MODEL PAPER -1

SAKSHI SSC MODEL PAPERS 2019-20

SOCIAL STUDIES –PAPER -2

(HISTORY & CIVICS)

Time: 2.45 Mts.

Marks;50

Instructions:

- i. 15 Minutes are allotted for reading the question paper in addition to 2.30 hours for writing the answers.
- ii. All answers should be written in a separate answer booklet.
- iii. There are four sections in the questions paper.
- iv. There is an internal choice in Section – IV.
- v. Answers should be visible and legible.

SECTION – 1

Note:

- i. Answer all the questions
- ii. Each question carries $\frac{1}{2}$ mark.

12X1/2=06

1. The 20th century was called ‘the age of extremes’ by

- Florence Owens
- Kustodiev
- Stalin
- Eric Hobsbawm

2. Which among the following was not true in the context of Second World War.

- The worst effected were the European countries
- The Industries of USA were highly damaged

- Colonial powers could no longer justify their colonial policies
 - USSR emerged as champion of anti-colonial struggles
3. Choose the odd one .
- Britain – Churchill
 - America – Roosevelt
 - Italy – Hitler
 - Russia – Lenin
4. Sun yet sen's ideas became on the basis of the political philosophy of the ---
- Communist Party of China
 - Regional party
 - Kuomintang
 - China liberation party
5. To throw out the British, he went secretly to Germany and then to Japan and raised an army of Indian soldiers in 1942. Who is the national leader ?
6. Cabinet mission was sent to India in -----
- 1950
 - 1932
 - 1946
 - 1947
7. Dr.B.R.Ambedkar belonged to this state.
- Tamil nadu
 - Maharastra
 - Kerala
 - Uttar Pradesh

8. Read the information given below and answer the following questions!

Coalition Governments and some political parties from 1980's

Governing Parties National Front 1989-1990	Governing Parties United Front 1996-1998	Governing Parties National Democratic Alliance 1998-2004
JD; DMK; AGP; TDP ; Jammu & Kashmir National Conference (JKNC)	JKNC ; TDP; TMC; CPI; AGP; DMK; MGP; Samajwadi Party	JDU; SAD; AIADMK, JKNC; Trinamool Congress; Biju Janata Dal ; Shiva Sena ;
Supporting Parties CPM; CPI, BJP	Supporting Parties CPM	Supporting Parties TDP
This is not a complete list of political parties that either supported or were part of the government. Often we have listed only those parties that had more 5 or MPs		

Question; name the National party which part of the United Front government.

9. Which two countries were signed the Panchasheel agreement.

- China – Russia
- India – Sri lanka
- India – China
- China – America

10. The first coalition government was led by -----

- Indhira gandhi
- Vajpayee
- V.P Singh
- Morarji Desai

11. The Indian who influenced Martin luther king Jr.

- Vivekananda
- Tagore
- Nehru
- Gandhi

12. Which of the following is not an autonomous body?

- Judiciary
- Election commission
- CPIC & SPIC
- NCPCR (National Commissioner for Protection of Child Rights)

SECTION – II

Note:

i) Answer all the question

ii) Each question carries 1 mark

8X1=8

13. What is the immediate cause for World War – 1?

14. When did the bombing on the Hiroshima take place?

15. Which of the following associated with the person shown in the picture.

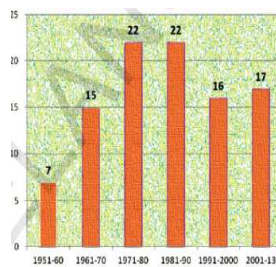


- Father of the Nation
- President of the Indian Constitution
- Second Prime Minister of India

16. Who is known as the founder of Modern China?

17. What was the policy adopted by the British to weaken Congress?

18. Answer the following question based on the graph given below.



Graph 1 : Since the Constitution was Came into force on 26th January 1950 till 2013 nearly 99 amendments were made.

Question: in which decade 17 amendments were made?

19. Name the party system that has been followed in India.

20. What type of technique did the Vietnamese use to fight the war with the USA?

SECTION – III

Note:

- i. Answer all the questions
- ii. Each question carries two marks.

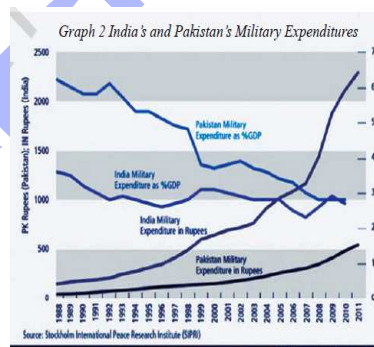
8X2=16

21. What was the Tebhaga movement? Who led it?
22. What are the two constitutional similarities of India and Japan?
23. Study the map given below and answer the following questions.



- i. How were the British able to implement their 'divide and rule' policy in Nigeria?

24. Write the main reasons for Assom movement.
25. Study the graph given below and answer the following questions.



Questions:

- a) This information was published by which institution?
- b) Which country was spending more share of its GDP for military expenditure by the year 2000

26. Explain the roll played by Sardar Vallabhbhai Patel in the unification of states?

27. Mention any four changes that occurred in the society due to the Russian Revolution.

28. What were the demands of the Muslim League that were not acceptable to the Congress? Do you agree with the reasons of the congress?

SECTION – IV

Note:

i. Answer all the questions

ii. Answer any one from internal choice of each question.

iii. Each question carries 4 marks.

5X4=20

29. Discuss the global impact of Russian Revolution.

Or

Is veto power to a few countries in the UNO helping or barrier for worlds peace?

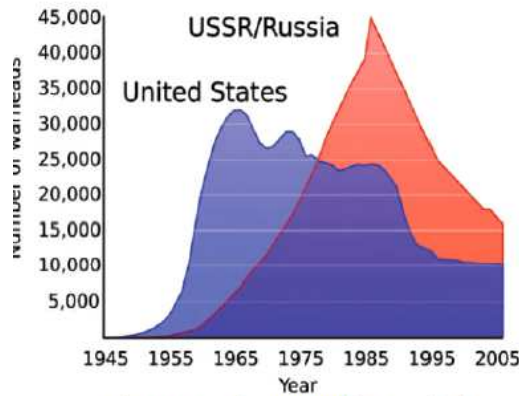
Discuss

30. Observe the given table and analyse the data of Electors.

Electors	Male	Female	Others	Total
No.of Electors	43.7 crores	39.7 crores	28.5 thousands	83.4 crores
No. of Electors who voted	29.2 crores	26.01 crores	1968 thousands	55.3 crores
Polling percentage	67.00%	65.54%	7%	66.30%

Or

Observe the graph given below and answer the following questionsl



Graph 1 : US and USSR nuclear stockpiles

Questions:

- i. Which country has more nuclear stock piles during 1995-1975?
- ii. What is the number of warheads that United States had in 1965?
- iii. What led the countries to emerge camps after second world war?
- iv. Why the countries decreased their nuclear stock piles after 1990?

31. Explain the importance of regional parties in Democracy.

Or

What is purpose of Lok Adalat?

32. "Telcome revolution has brought several changes in human life now-a-days."

Coment on it.

Or

Read the para given below and answer the question

The UN thus started with twin objectives of ensuring lasting peace and human development. At the same time it recognized the autonomy of states and promised not to interfere in any internal affair of a country except in cases mandated by serious human rights violation or threat to world peace.

Question: comment on the objectives of the UN.

33. Locate the following in world map.

i. Nepal

ii. U.S.A

iii. Indian Ocean

iv. Egypt

Or

Mark the following on the outline map of the world

A) The country which was ruled by the Nazi party

B) The motherland of Mussolini

C) The country which used atom bombs in World War-II

D) The northern border of African continent

www.sakshieducation.com